

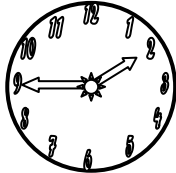

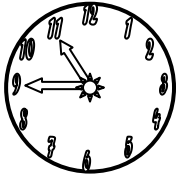
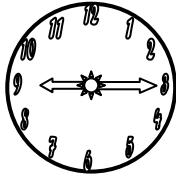


WHAT TIME IS IT?

Circle the right option

Maestralidia.com





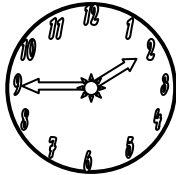

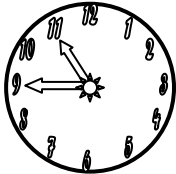
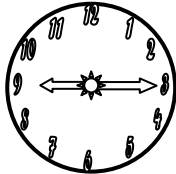
1- 	2- 	3- 
a- It's three o'clock b- It's a quarter past five. c- It's five o'clock.	a- It's half past one. b- It's six o'clock. c- It's one o'clock.	a- It's nine o'clock b- It's two o'clock. c- It's a quarter to two.
4- 	5- 	6- 
a- It's half past six. b- It's six o'clock. c- It's half past ten.	a- It's nine o'clock b- It's a quarter to eleven. c- It's a quarter past nine.	a- It's a quarter past nine. b- It's a quarter to three. c- It's nine o'clock.

WHAT TIME IS IT?

Circle the right option

Maestralidia.com



1- 	2- 	3- 
a- It's three o'clock b- It's a quarter past five. c- It's five o'clock.	a- It's half past one. b- It's six o'clock. c- It's one o'clock.	a- It's nine o'clock b- It's two o'clock. c- It's a quarter to two.
4- 	5- 	6- 
a- It's half past six. b- It's six o'clock. c- It's half past ten.	a- It's nine o'clock b- It's a quarter to eleven. c- It's a quarter past nine.	a- It's a quarter past nine. b- It's a quarter to three. c- It's nine o'clock.